

Instructions: Show all work. Use exact answers unless specifically asked to round. Be sure to complete all parts of each problem.

1. Draw six level curves for the function $f(x, y) = \frac{x}{x^2 + y^2}$. Use both positive and negative values for z . (10 points)

$$z = \frac{x}{x^2 + y^2} \quad z=0 \Rightarrow x=0$$

$$x^2 + y^2 = \frac{x}{z}$$

$$\sqrt{y^2} = \pm \sqrt{\frac{x}{z} - x^2}$$

$$z=1 \quad y = \pm \sqrt{x - x^2}$$

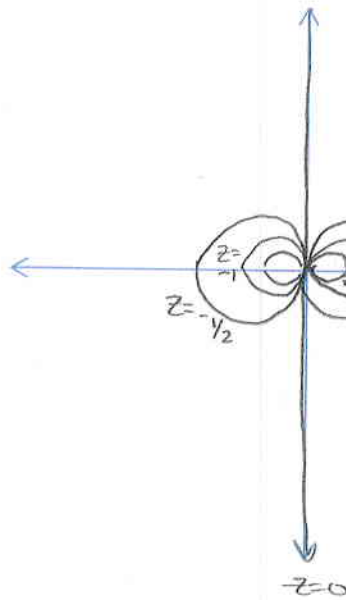
$$z=2 \quad y = \pm \sqrt{\frac{1}{2}x - x^2}$$

$$z=1/2 \quad y = \pm \sqrt{2x - x^2}$$

$$z=-1/2 \quad y = \pm \sqrt{-2x - x^2}$$

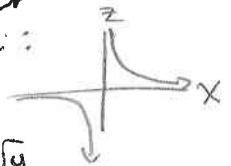
$$z=-1 \quad y = \pm \sqrt{-x - x^2}$$

$$z=-2 \quad y = \pm \sqrt{-\frac{1}{2}x - x^2}$$



As z gets closer to zero, the cross-sections and get larger until they have infinite radius, then flip to the other side of the graph

as one approaches line $y=0$ the graph goes to an asymptote on either side as the cross-sectional circles go to zero radius in the limit in profile:



2. Find the limits if they exist, or prove that they do not exist. (5 points each)

a. $\lim_{(x,y) \rightarrow (0,0)} \frac{x-y}{\sqrt{x}-\sqrt{y}} \cdot \frac{\sqrt{x}+\sqrt{y}}{\sqrt{x}+\sqrt{y}} = \lim_{(x,y) \rightarrow (0,0)} \frac{(x-y)(\sqrt{x}+\sqrt{y})}{x-y} = \lim_{(x,y) \rightarrow (0,0)} \sqrt{x}+\sqrt{y}$

$$\boxed{= 0}$$

b. $\lim_{(x,y) \rightarrow (0,0)} \frac{x^3 y}{x^6 + y^2}$ path $x=0 \quad \lim_{y \rightarrow 0} \frac{0}{y^2} = 0$

$$\boxed{\text{DNE}}$$

$x^0 = y^2$
 $y = x^3$ path $y = kx^3$
 $\lim_{x \rightarrow 0} \frac{x^3 \cdot kx^3}{x^6 + k^2 x^6} = \lim_{x \rightarrow 0} \frac{kx^6}{x^6(1+k^2)} = \lim_{x \rightarrow 0} \frac{k}{1+k^2} = \frac{k}{1+k^2}$

$\neq 0$ if $k \neq 0$

c. $\lim_{(x,y) \rightarrow (0,0)} \frac{x^2 y^2}{3y^4 + x^4}$ in polar $\lim_{r \rightarrow 0} \frac{r^2 \cos^2 \theta r^2 \sin^2 \theta}{3r^4 \sin^4 \theta + r^4 \cos^4 \theta} =$

$$\lim_{r \rightarrow 0} \frac{r^4 (\cos^2 \theta \sin^2 \theta)}{r^4 (3 \sin^4 \theta + \cos^4 \theta)} = \frac{\cos^2 \theta \sin^2 \theta}{3 \sin^4 \theta + \cos^4 \theta}$$

depends on θ so $\boxed{\text{DNE}}$

(or use path $y=kx$)

d. $\lim_{(x,y,z) \rightarrow (0,0,0)} \frac{xy + yz + xz}{x^2 + y^2 + z^2}$ in spherical

$$\lim_{\rho \rightarrow 0} \frac{\rho^2 \sin \phi \cos \theta \sin \theta + \rho^2 \sin \phi \sin \theta \cos \phi + \rho^2 \sin \phi \cos \theta \cos \phi}{\rho^2}$$

depends on ϕ and θ so $\boxed{\text{DNE}}$

3. Find the indicated partial derivatives for the function $f(x, y, z) = e^{-x} \sin(yz)$. (5 points each)

a. $\frac{\partial f}{\partial x} = \boxed{-e^{-x} \sin yz}$

$$f_y = z e^{-x} \cos(yz)$$

b. $\frac{\partial f}{\partial z} = \boxed{y e^{-x} \cos(yz)}$

c. $f_{yz} = \boxed{e^{-x} \cos(yz) - yz e^{-x} \sin(yz)}$
 $= e^{-x} (\cos(yz) - yz \sin(yz))$

d. $f_{yzx} = \boxed{-e^{-x} (\cos(yz) - yz \sin(yz))}$

4. Find the total differential of the function $f(x, y, z) = e^y \cos(x) + z^2$. Evaluate it at the point $(\pi, 0, 2)$, and use it to approximate the value of the function at $(\frac{7\pi}{6}, -0.1, \frac{9}{4})$. (10 points)

$$\begin{aligned} dw &= f_x dx + f_y dy + f_z dz \\ &= (-\sin(x)e^y) dx + (e^y \cos(x)) dy + (2z) dz \\ &= 0 dx + (-1) dy + 4 dz \end{aligned}$$

$$f(\pi, 0, 2) = 1(-1) + 4 = -1 + 4 = 3$$

$$\begin{aligned} f\left(\frac{7\pi}{6}, -0.1, \frac{9}{4}\right) &\approx 3 + \left[0\left(\frac{7\pi}{6}\right) - 1(-0.1) + 4\left(\frac{9}{4}\right)\right] = \\ &3 + .1 + 9 = \boxed{12.1} \end{aligned}$$

5. Find $\frac{dw}{dt}$ for the following $w = xy^2 + x^2z + yz^2$, $x = t^2$, $y = \arccos(t)$, $z = e^{-2t}$ using the chain rule. Be sure your final answers contain only t . (10 points)

$$\frac{dw}{dt} = \frac{\partial w}{\partial x} \frac{dx}{dt} + \frac{\partial w}{\partial y} \frac{dy}{dt} + \frac{\partial w}{\partial z} \frac{dz}{dt}$$

$$\frac{dx}{dt} = 2t$$

$$\frac{\partial w}{\partial x} = y^2 + 2xz = \arccos^2 t + 2t^2 e^{-2t}$$

$$\frac{dy}{dt} = \frac{-1}{\sqrt{1-t^2}}$$

$$\frac{\partial w}{\partial y} = 2xy + z^2 = 2t^2 \arccos t + e^{-4t}$$

$$\frac{dz}{dt} = -2e^{-2t}$$

$$\frac{\partial w}{\partial z} = x^2 + 2yz = t^4 + 2e^{-2t} \arccos t$$

$$\frac{dw}{dt} = (\arccos^2 t + 2t^2 e^{-2t}) 2t - \frac{(2t^2 \arccos t + e^{-4t})}{\sqrt{1-t^2}} - 2e^{-2t} (t^4 + 2e^{-2t} \arccos t)$$

6. Find the implicit partial derivative $\frac{\partial w}{\partial y}$ for the function $x^2 + y^2 - yzw + 3zw^4 - \cosh(y) = 0$ by both means (the long way and by means of the short-cut formulas). Verify that both produce the same results. (15 points)

longway:

$$2y - zw - yz w_y + 12zw^3 w_y - \sinh(y) = 0$$

$$2y - zw - \sinh(y) = yz w_y - 12zw^3 w_y$$

$$\frac{2y - zw - \sinh(y)}{yz - 12zw^3} = \frac{(yz - 12zw^3) w_y}{yz - 12zw^3}$$

$$\frac{\partial w}{\partial y} = w_y = \frac{2y - zw - \sinh(y)}{yz - 12zw^3}$$

short way $F(x, y, z, w) = x^2 + y^2 - yzw + 3zw^4 - \cosh(y)$:

$$\frac{\partial w}{\partial y} = - \frac{F_y}{F_w} = - \frac{2y - zw - \sinh(y)}{-yz + 12zw^3}$$

checks ✓

7. Find the directional derivative for the function $f(x, y, z) = x \tan(y - z)$ at the point $(4, 3, 1)$ in the direction of $\vec{v} = \hat{i} - 2\hat{j} + 3\hat{k}$. Then state the maximum value of the directional derivative at that point. (10 points)

$$\nabla f = \langle \tan(y - z), x \sec^2(y - z), -x \sec^2(y - z) \rangle$$

$$\nabla f(4, 3, 1) = \langle \tan(2), 4 \sec^2(2), -4 \sec^2(2) \rangle$$

$$\|\vec{v}\| = \sqrt{1 + 2^2 + 3^2} = \sqrt{1 + 4 + 9} = \sqrt{14}$$

$$\hat{u} = \frac{1}{\sqrt{14}} \hat{i} - \frac{2}{\sqrt{14}} \hat{j} + \frac{3}{\sqrt{14}} \hat{k}$$

$$\nabla f \cdot \hat{u} = \langle \tan(2), 4 \sec^2(2), -4 \sec^2(2) \rangle \cdot \left\langle \frac{1}{\sqrt{14}}, \frac{-2}{\sqrt{14}}, \frac{3}{\sqrt{14}} \right\rangle =$$

$$\frac{\tan 2}{\sqrt{14}} - \frac{8 \sec^2(2)}{\sqrt{14}} - \frac{12 \sec^2 2}{\sqrt{14}} = \frac{\tan 2 - 20 \sec^2 2}{\sqrt{14}} \approx -31.45$$

max value =

$$\sqrt{\tan^2 2 + 16 \sec^4 2 + 16 \sec^4 2}$$

$$= \sqrt{\tan^2 2 + 32 \sec^4 2}$$

$$\approx 32.78$$

8. Find an equation of the tangent plane to the surface at $xy^2 + 3x - z^2 = 4$ at the point $(2, 1, -2)$. Then state the equation of the normal line at the same point. (10 points)

$$F(x, y, z) = xy^2 + 3x - z^2 - 4$$

$$\nabla F = \vec{n} = \langle y^2 + 3, 2xy, -2z \rangle$$

$$\nabla F(2, 1, -2) = \langle 1+3, 2(2)(1), -2(-2) \rangle = \langle 4, 4, 4 \rangle$$

tangent plane: $4(x-2) + 4(y-1) + 4(z+2) = 0$

normal line: symmetric $\left| \frac{x-2}{4} = \frac{y-1}{4} = \frac{z+2}{4} \right|$

vector-valued $(4t+2)\hat{i} + (4t+1)\hat{j} + (4t-2)\hat{k} = \vec{r}(t)$

9. Find the critical points for the function $f(x, y) = x^3 + 6xy + 10y^2 + 2y + 4$, and characterize each point as either a maximum, minimum, saddle point, or cannot be determined. (10 points)

$$f_x = 3x^2 + 6y = 0 \Rightarrow -6y = \frac{3x^2}{3} \Rightarrow -2y = x^2 \Rightarrow y = -\frac{1}{2}x^2$$

$$f_y = 6x + 20y + 2 = 0$$

$$6x - 10(-2y) + 2 = 0$$

$$6x - 10x^2 + 2 = 0$$

$$10x^2 - 6x - 2 = 0$$

$$5x^2 - 3x - 2 = 0$$

$$x = \frac{+3 \pm \sqrt{9 - 4(5)(-2)}}{10}$$

$$\sqrt{9+40} = \sqrt{49} = 7$$

$$x = \frac{3 \pm 7}{10} = \frac{10}{10}, \frac{-4}{10} = 1, -\frac{2}{5}$$

$$x=1 \quad y = -\frac{1}{2} \quad (1, -\frac{1}{2})$$

$$x = -\frac{2}{5} \quad y = -\frac{2}{25} \quad (-\frac{2}{5}, -\frac{2}{25})$$

$$f_{xx} = 6x$$

$$f_{yy} = 20$$

$$f_{xy} = 6$$

$$D(1, -\frac{1}{2}) = 6(20) - 6^2 = 120 - 36 > 0$$

$$f_{xx}(1, -\frac{1}{2}) = 6 > 0 \cup$$

$(1, -\frac{1}{2})$ is a minimum

$$D(-\frac{2}{5}, -\frac{2}{25}) = (-\frac{12}{5})(20) - 6^2 < 0$$

$(-\frac{2}{5}, -\frac{2}{25})$ is a saddle point

10. Find the absolute extrema for the function $f(x, y) = x^2 - 4xy + 5$ over the region $R: \{(x, y) | 0 \leq x \leq 4, 0 \leq y \leq \sqrt{x}\}$. Sketch the region. (15 points)

① critical points

$$f_x = 2x - 4y = 0 \Rightarrow 2x = 4y \Rightarrow x = 2y$$

$$f_y = -4x = 0 \quad x = 0 \Rightarrow y = 0 \quad (0, 0)$$

② boundaries ($x=0$ is not a true boundary eg.)

a) $y=0$

$$f(x, 0) = x^2 + 5$$

$$f'(x, 0) = 2x \quad x=0 \quad (0, 0) \text{ (again)}$$

b) $x=4$

$$f(4, y) = 16 - 16y + 5 = -16y + 21$$

$$f'(4, y) = -16 \neq 0$$

c) $y = \sqrt{x}$

$$f(x, \sqrt{x}) = x^2 - 4x^{3/2} + 5$$

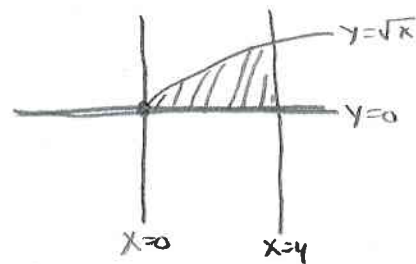
$$f'(x, \sqrt{x}) = 2x - 6x^{1/2} = 0$$

$$x^{1/2}(2\sqrt{x} - 6) = 0$$

$$x=0 \quad \& \quad 2\sqrt{x} = 6 \Rightarrow \sqrt{x} = 3 \quad x=9$$

$x=0 \Rightarrow (0, 0)$
again

$x=9$ outside
region



pts to check

$$f(0, 0) = 5$$

$$f(4, 0) = 16 - 0 + 5 = 21$$

$$f(4, 2) = 16 - 32 + 5 = -11$$

③ Corners

$$(0, 0)$$

$$(4, 0)$$

$$(4, 2)$$

@ (4, 0) absolute max
of 21

@ (4, 2) absolute min
of -11

11. Minimize the function $f(x, y) = 2x + y$ subject to the constraint $xy = 32$ using Lagrange Multipliers. (10 points)

$$F(x, y, \lambda) = 2x + y - \lambda(xy - 32)$$

$$F_x = 2 - \lambda y = 0 \Rightarrow 2 = \lambda y \Rightarrow \lambda = \frac{2}{y}$$

$$F_y = 1 - \lambda x = 0$$

$$1 = \lambda x \Rightarrow \lambda = \frac{1}{x}$$

$$\Rightarrow \frac{2}{y} = \frac{1}{x} \Rightarrow 2x = y$$

into constraint

$$x(2x) = 32$$

$$2x^2 = 32$$

$$x^2 = 16$$

$$x = \pm 4$$

$$\Rightarrow (4, 8)$$

$$(-4, -8)$$

$$f(4, 8) = 2(4) + 8 = 16 \quad \text{Maximum}$$

$$f(-4, -8) = 2(-4) - 8 = -16 \quad \text{Minimum}$$