


Instructions: Show all work. Answers without work required to obtain the solution will not receive full credit. Some questions may contain multiple parts: be sure to answer all of them. Give exact answers unless specifically asked to estimate.

1. Find the volume of the solid of revolution defined by $y = \frac{1}{4}x^2$, $y = 5 - x^2$ revolved around the x -axis. (6 points)

$$r = 5 - x^2 - \frac{1}{4}x^2 = 5 - \frac{5}{4}x^2 = 5(1 - \frac{1}{4}x^2)$$

$$= 0 \Rightarrow 1 = \frac{1}{4}x^2 \Rightarrow 4 = x^2 \Rightarrow x = \pm 2 \quad r_i = \frac{1}{4}x^2 \quad r_o = 5 - x^2$$



$$\pi \int_{-2}^2 -\left(\frac{1}{4}x^2\right)^2 + (5 - x^2)^2 dx = 2\pi \int_0^2 -\frac{1}{16}x^4 + (25 - 10x^2 + x^4) dx$$

$$2\pi \int_0^2 -10x^2 + 25 + \frac{15}{16}x^4 dx = 2\pi \left[-\frac{10}{3}x^3 + 25x + \frac{3}{16}x^5 \right]_0^2 =$$

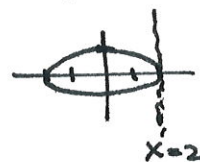
$$2\pi \left[-\frac{80}{3} + 50 + 6 \right] = 2\pi \left[\frac{88}{3} \right] = \frac{176\pi}{3}$$

2. Set up an integral to find the volume of the solid of revolution defined by $x^2 + 4y^2 = 4$, revolved around the line $x = 2$. You do not need to integrate it. (5 points)

$$4y^2 = \frac{4 - x^2}{4}$$

$$y = \pm \frac{\sqrt{4 - x^2}}{2}$$

$$r = \frac{\sqrt{4 - x^2}}{2} - \left(-\frac{\sqrt{4 - x^2}}{2} \right) = \sqrt{4 - x^2}$$



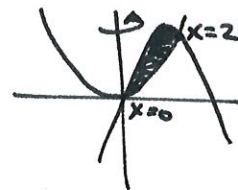
$$2\pi \int_{-2}^2 \sqrt{4 - x^2} (2 - x) dx \quad (\text{using shells})$$

3. Find the volume of the solid of revolution bounded by $y = x^2$, $y = 6x - 2x^2$ around the y -axis. (6 points)

$$2\pi \int_0^2 (6x - 2x^2 - x^2) x dx$$

$$2\pi \int_0^2 6x^2 - 3x^3 dx = 2\pi \left[2x^3 - \frac{3}{4}x^4 \right]_0^2 =$$

$$2\pi [16 - 12] = 8\pi$$



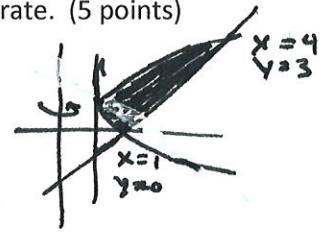
4. Set up an integral to find the volume of the solid of revolution defined by $x = (y - 1)^2$, $x - y = 1$, revolved around the line $x = -1$. You do not need to integrate. (5 points)

$$x = y + 1$$

$$r_o = y + 1 + 1 = y + 2$$

$$r_i = (y - 1)^2 + 1$$


$$\pi \int_0^3 (y + 2)^2 - [(y - 1)^2 + 1]^2 dy$$



5. Set up an integral to find the surface area of the surface of the surface of revolution defined by $y = xe^x$ on the interval $[0, 1]$ revolved around the x -axis. (5 points)

$$y' = e^x + xe^x = e^x(1+x)$$

$$2\pi \int_0^1 xe^x \sqrt{1 + e^{2x}(1+x)^2} dx$$



6. A spherical tank with a radius of 3 meters is full of water. Find the work done pumping all the water out of the top of the tank. Recall that the density of water is 1000 kg/m^3 . (7 points)

$$1000 \int_0^6 \pi (9 - (y-3)^2) (6-y) dy$$

$$1000\pi \int_0^6 (9 - (9 - 6y + y^2)) (6-y) dy$$

$$1000\pi \int_0^6 (6y - y^2) (6-y) dy = 1000\pi \int_0^6 (36y - 6y^2 - 6y^2 + y^3) dy$$

$$1000\pi \left[18y^2 - 4y^3 + \frac{1}{4}y^4 \right]_0^6 = 1000\pi [648 - 864 + 324]$$

$$1000\pi (108) = 108,000\pi \text{ N}\cdot\text{m}$$



$$x^2 + y^2 = r^2$$

$$x^2 + (y-3)^2 = 9$$

$$(y-3)^2 = 9 - x^2$$

$$y-3 = \pm \sqrt{9-x^2}$$

$$y = 3 \pm \sqrt{9-x^2}$$

$$x^2 = 9 - (y-3)^2$$

$$x = \pm \sqrt{9 - (y-3)^2}$$

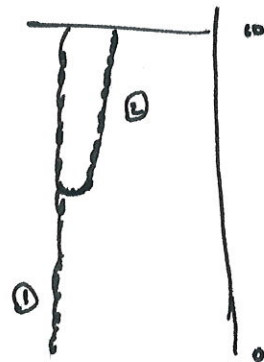
7. A 10-ft chain weighs 25 lbs and hangs from a ceiling. Find the work done in lifting the lower end of the chain to the ceiling. (5 points)

$$\frac{25}{10} = 2.5 \text{ lbs/ft}$$

$$\int_0^{10} 2.5 \cdot \frac{1}{2} y \, dy =$$

$$1.25 \int_0^{10} y \, dy = 0.625 y^2 \Big|_0^{10} =$$

$$0.625 (100) = 62.5 \text{ ft.-lbs.}$$




8. Find the average value of the function $f(t) = e^{\sin t} \cos(t)$ on the interval $[0, \frac{\pi}{2}]$. Use your calculator to find c so that $f(c) = \bar{f}$. (5 points)

$$\bar{f} = \frac{2}{\pi} \int_0^{\pi/2} e^{\sin t} \cos t \, dt \quad \begin{array}{l} u = \sin t \\ du = \cos t \, dt \end{array}$$

$$= \frac{2}{\pi} [e^{\sin t}]_0^{\pi/2} = \frac{2}{\pi} [e - 1]$$

$$f(c) = \bar{f}$$

$$c \approx .08986305$$



9. Set up the three integrals needed to find the centroid of the region bounded by $y = x^3$, $x + y = 2$, $y = 0$ with constant density. Sketch the region. You do not need to integrate. (6 points)

$$M = \int_0^1 x^3 \, dx + \int_1^2 (-x+2) \, dx$$

$$M_y = \int_0^1 x \cdot x^3 \, dx + \int_1^2 x(-x+2) \, dx$$

$$M_x = \int_0^1 \frac{1}{2} (x^3)^2 \, dx + \int_1^2 \frac{1}{2} (-x+2)^2 \, dx$$

$$\bar{x} = \frac{M_y}{M}, \quad \bar{y} = \frac{M_x}{M}$$



10. Find the solution to $y' = \frac{xy \sin x}{y+1}$, $y(0) = 1$. (5 points)

$$\frac{y+1}{y} dy = x \sin x dx$$

$$\int 1 + \frac{1}{y} dy = \int x \sin x dx$$

$$y + \ln y = -x \cos x + \sin x + C$$

$$1 + \ln 1 = -0 \cos 0 + \sin 0 + C$$

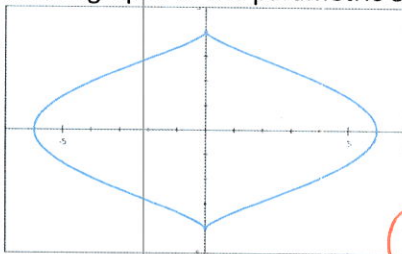
$$C = 1$$

$$y + \ln y = -x \cos x + \sin x + 1$$

u	dv
+ x	sin x
- 1	- cos x
0	- sin x

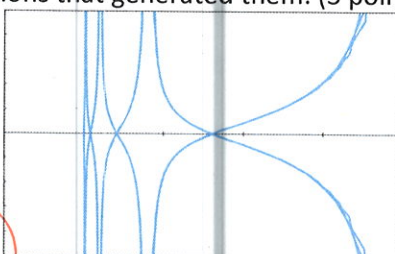
11. Match the graphs to the parametric equations that generated them. (3 points each)

iv.



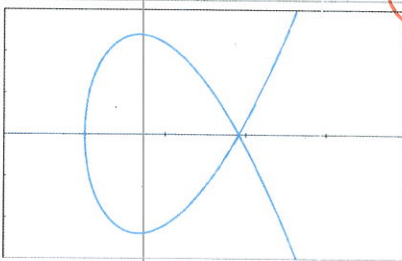
a.

c.




ii

iii



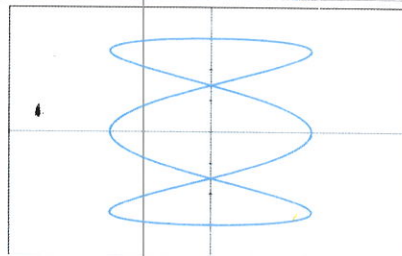
b.

d.




i

v



c.

e.



vi

- i. $x = \ln t \cos t, y = \sin t$ **D**
 ii. $x = \sec t, y = \tan(8t)$ **C**
 iii. $x = \cosh(t), y = (t^2 - 3) \sinh(t)$ **B**

- iv. $x = 6 \sin^3 t, y = 4 \cos t$ **A**
 v. $x = \sin(3t), y = 3 \cos t$ **C**
 vi. $x = \sin^2 t + \cos t, y = t \cos t$ **E**

12. Find the equation of the tangent line to the graph $x = t - t^{-1}$, $y = 1 + t^2$ at $t = 1$. (5 points)

$$\frac{dy}{dx} = \frac{dy/dt}{dx/dt}$$

$$\frac{dy}{dt} = 1 + \frac{1}{t^2} \quad \frac{dy}{dt} = 2t$$

$$\frac{dy}{dx}(1) = \frac{2(1)}{1 + \frac{1}{1^2}} = \frac{2}{2} = 1$$

$$y(1) = 2$$

$$x(1) = 0$$

$$y - 2 = 1(x - 0)$$

$$\boxed{y = x + 2}$$

13. Set up the integral to find the length of arc of the curve $x = t^4 - 2t^3 - 2t^2$, $y = t^3 - 1$ on the interval $[0, 2]$. You do not need to integrate. (5 points)

$$\frac{dy}{dt} = 3t^2 \quad \frac{dx}{dt} = 4t^3 - 6t^2 - 4t$$

$$S = \int_0^2 \sqrt{(3t^2)^2 + (4t^3 - 6t^2 - 4t)^2} dt$$

14. Set up the integral to find the area inside $r = 3 + 2 \cos \theta$ and $r = 3 + 2 \sin \theta$. (5 points)

$$3 + 2 \cos \theta = 3 + 2 \sin \theta$$

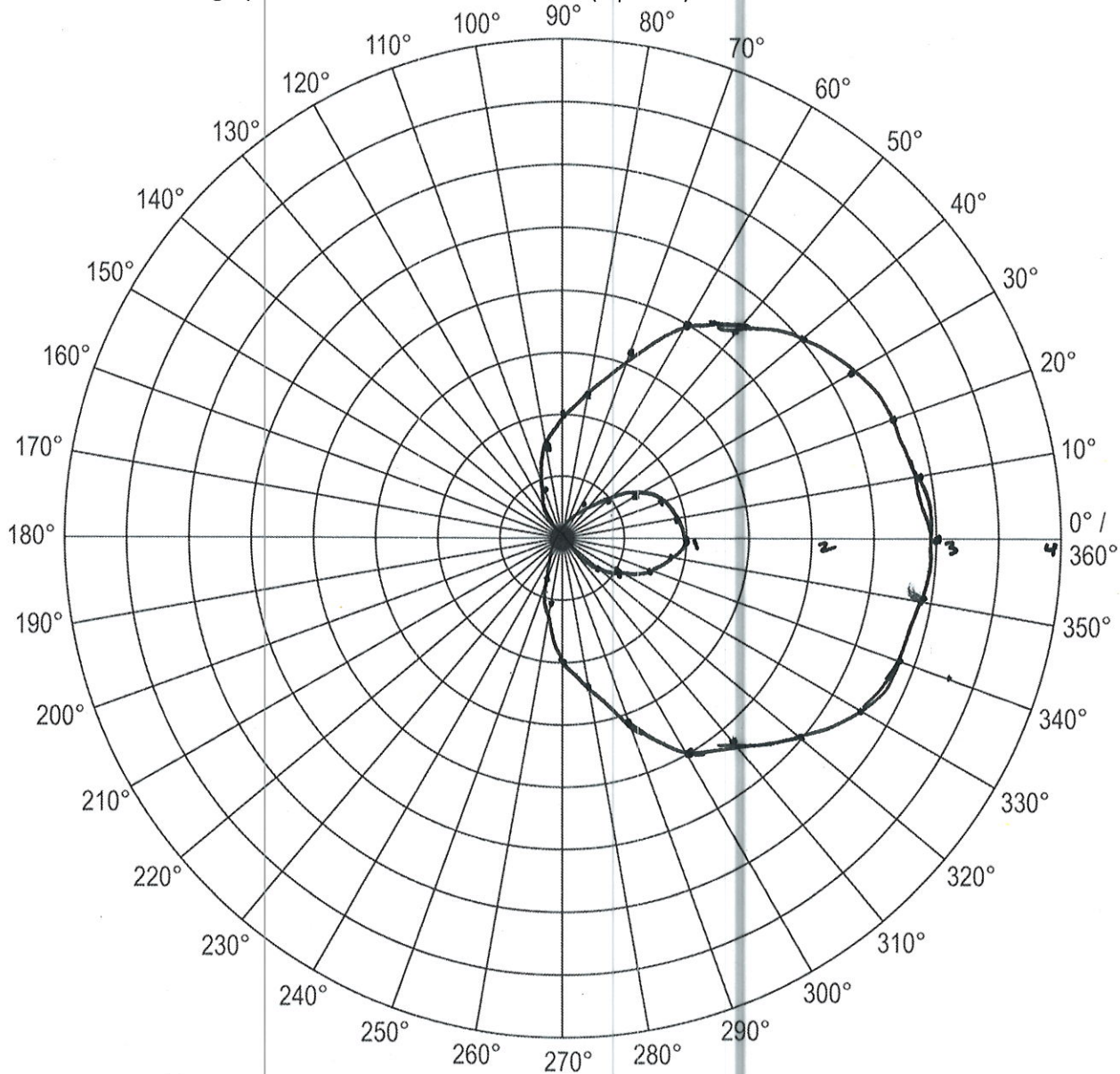
$$\cos \theta = \sin \theta$$

$$\pi/4, 5\pi/4, \text{ etc}$$



$$\frac{1}{2} \int_{-\pi/4}^{\pi/4} (3 + 2 \sin \theta)^2 d\theta + \frac{1}{2} \int_{\pi/4}^{5\pi/4} (3 + 2 \cos \theta)^2 d\theta$$

15. Sketch the graph of the curve $r = 1 + 2 \cos \theta$. (6 points)



16. Write the sequence $\left\{ \frac{1}{2}, -\frac{4}{3}, \frac{9}{4}, -\frac{16}{5}, \frac{25}{6}, \dots \right\}$ as a formula for a_n in terms of n . (4 points)

Start $n=1$

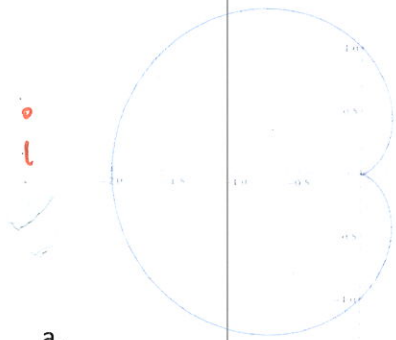
$$a_n = \frac{(-1)^{n+1} n^2}{n+1}$$

or

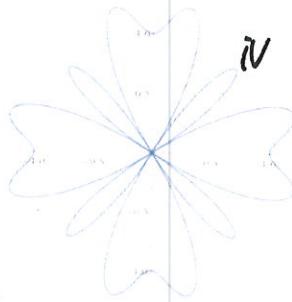
Start
 $n=0$

$$a_n = \frac{(-1)^n (n+1)^2}{n+2}$$

17. Match the equation to the graph of the polar curve. (3 points each)




a.




d.



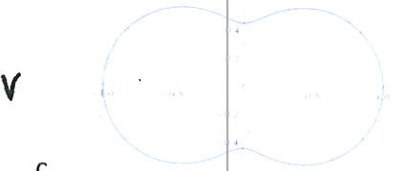
g.




b.



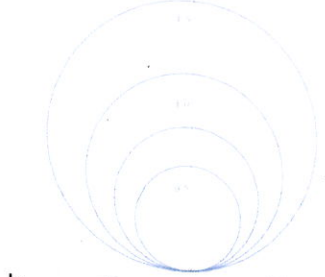
e.



c.



f.



h.

- i. $r = 1 - \cos \theta$ **A**
- ii. $r = \ln \theta$ **B**
- iii. $r = \sin(6 \sin \theta)$ **F**
- iv. $r = \sin^2(4\theta) + \cos(4\theta)$ **D**

- v. $r = \sqrt{1 - \frac{4}{5} \sin^2 \theta}$ **C**
- vi. $r = e^{\sin \theta} - 2 \cos(4\theta)$ **E**
- vii. $r = e^{\theta/10} \sin \theta$ **H**
- viii. $r = 2 \cos \theta - \sec \theta$ **G**

18. Determine whether the sequence converges or diverges. If it converges, what does it converge to? (4 points each)

a. $a_n = \frac{n^3}{n+1}$

diverges

$$\lim_{n \rightarrow \infty} \frac{n^3}{n+1} = \infty$$

b. $a_n = e^{2n/(n+2)}$

$$\lim_{n \rightarrow \infty} e^{\frac{2n}{n+2}} = \lim_{n \rightarrow \infty} e^{2 - \frac{4}{n+2}} = e^2 \cdot \lim_{n \rightarrow \infty} e^{-\frac{4}{n+2}} = e^2 \cdot e^0 = e^2$$

Converges

19. Find the sum of the series, if it exists. (4 points each)

a. $\sum_{n=1}^{\infty} \frac{3^{n+1}}{\pi^n}$ $\sum_{n=1}^{\infty} 3\left(\frac{3}{\pi}\right)^n$ geometric

$$\frac{3\left(\frac{3}{\pi}\right)}{1 - \frac{3}{\pi}} = \frac{\frac{9}{\pi}}{\frac{\pi-3}{\pi}} = \frac{9}{\pi} \cdot \frac{\pi}{\pi-3} = \frac{9}{\pi-3}$$

c. $\sum_{n=1}^{\infty} (e^{1/n} - e^{1/(n+1)})$

telescoping

$$e^1 - \lim_{n \rightarrow \infty} e^{\frac{1}{n+1}} = e - 1$$

b. $\sum_{n=3}^{\infty} \left(\frac{3}{n}\right)^4$

$$= \sum_{n=3}^{\infty} \frac{81}{n^4} = \sum_{n=1}^{\infty} \frac{81}{n^4} - 81 - \frac{81}{16}$$

$$= \frac{81\pi^4}{90} - 81 - \frac{81}{16} = \boxed{\frac{9\pi^4}{10} - \frac{1377}{16}}$$

20. For each series select an appropriate test to determine convergence or divergence of the series. (5 points each)

a. $\sum_{n=1}^{\infty} \frac{n^2 2^{n-1}}{(-5)^n}$

ratio or root test
converges

d. $\sum_{n=2}^{\infty} \frac{1}{n\sqrt{\ln n}}$

integral test
diverges

b. $\sum_{n=1}^{\infty} \frac{\sin 2n}{1+2^n}$

(limit) comparison test
converges

e. $\sum_{k=2}^{\infty} \frac{k \ln k}{(k+1)^3}$

(direct) comparison test
converges

c. $\sum_{n=1}^{\infty} \frac{(-1)^n}{\cosh n}$

alternating series test
converges

21. Determine the interval of convergence of the radius of convergence for the power series

$$\sum_{n=1}^{\infty} \frac{n(2x-1)^n}{5^n}. \text{ Be sure to check the endpoints of the interval. (5 points)}$$

$$\lim_{n \rightarrow \infty} \left| \frac{(n+1)(2x-1)^{n+1}}{5^{n+1}} \cdot \frac{5^n}{n(2x-1)^n} \right| = \lim_{n \rightarrow \infty} \left| \frac{2x-1}{5} \right| < 1$$

$$-1 < \frac{2x-1}{5} < 1$$

$$-\frac{5}{2} < \frac{2x-1}{2} < \frac{5}{2}$$

$$-\frac{5}{2} < x - \frac{1}{2} < \frac{5}{2}$$

$$-2 < x < 3$$

$$(-2, 3)$$

$$R = \frac{5}{2}$$

at $x = -2$

$$\sum \frac{n(-5)^n}{5^n} = \sum n(-1)^n \text{ diverges}$$

$$\sum \frac{n5^n}{5^n} = \sum n \text{ diverges}$$

22. Find a power series for the function $f(x) = \frac{2}{3-x}$. (5 points)

$$= \frac{2/3}{1 - \frac{x}{3}}$$

$$a = \frac{2}{3}, r = \frac{x}{3}$$

$$f(x) = \sum_{n=0}^{\infty} \left(\frac{2}{3}\right) \left(\frac{x}{3}\right)^n$$

23. Use a power series to evaluate $\int \frac{t}{1+t^5} dt$. (5 points)

$$r = -t^5, a = t$$

$$\int \sum_{n=0}^{\infty} t(-t^5)^n dt = \sum_{n=0}^{\infty} (-1)^n \int t^{5n+1} dt =$$

$$\sum_{n=0}^{\infty} \frac{(-1)^n t^{5n+2}}{5n+2} + C$$

24. Rewrite $x^5 + 3x^4 - 2x$ as a Taylor series centered at $c = 1$. (5 points)

n	$n!$	$f^{(n)}(x)$	$f^{(n)}(c)$	$(x-c)^n$	$\frac{f^{(n)}(c)}{n!}(x-c)^n$
0	1	$x^5 + 3x^4 - 2x$	2	1	2
1	1	$5x^4 + 12x^3 - 2$	15	$(x-1)$	$15(x-1)$
2	2	$20x^3 + 36x^2$	56	$(x-1)^2$	$28(x-1)^2$
3	6	$60x^2 + 72x$	132	$(x-1)^3$	$22(x-1)^3$
4	24	$120x + 72$	192	$(x-1)^4$	$8(x-1)^4$
5	120	120	120	$(x-1)^5$	$(x-1)^5$
6	720	0	—	$(x-1)^6$	—

$$P_n(x) = (x-1)^5 + 8(x-1)^4 + 22(x-1)^3 + 28(x-1)^2 + 15(x-1) + 2$$

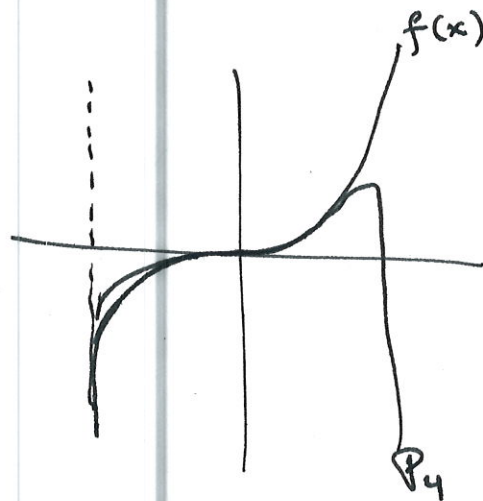
25. Find a Maclaurin series for $f(x) = x^2 \ln(1+x^3)$. Use the table of Maclaurin series included at the end of the exam. Graph the first 4 (non-zero) terms on the same graph as the original function. (5 points)

$$\ln(1+x) = \sum_{n=1}^{\infty} (-1)^{n-1} \frac{x^n}{n}$$

$$\ln(1+x^3) = \sum_{n=1}^{\infty} (-1)^{n-1} \frac{x^{3n}}{n}$$

$$x^2 \ln(1+x^3) = \sum_{n=1}^{\infty} (-1)^{n-1} \frac{x^{3n+2}}{n}$$

$$P_4(x) = x^5 - \frac{x^8}{2} + \frac{x^{11}}{3} - \frac{x^{14}}{4}$$

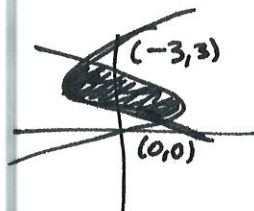


26. Find the area of the region bounded by $x = y^2 - 4y$ and $x = 2y - y^2$. Sketch the region. (6 points)

$$y^2 - 4y = 2y - y^2$$

$$\frac{2y^2}{2} = \frac{6y}{2} \quad y=0$$

$$y = 3$$



$$\int_0^3 (2y - y^2) - (y^2 - 4y) dy = \int_0^3 (6y - 2y^2) dy$$

$$3y^2 - \frac{2}{3}y^3 \Big|_0^3 = 27 - \frac{2}{3}(27) =$$

$$27 - 18 = 9$$

27. Which method of integration should be used to evaluate each integral? You do not need to integrate. If you are using a substitution method, state the substitution used. (3 points each)

a. $\int \cos x \ln(\sin x) dx$

$$u = \sin x$$

$$du = \cos x$$

by parts

d. $\int \cos^2 \theta \sin^2 \theta d\theta$

identities /

substitution

b. $\int x^5 e^{-x^3} dx$

by parts

e. $\int \sqrt{x^2 + 2x} dx$

trig substitution

c. $\int \frac{t}{t^4+2} dt$

substitution $t^2 = u$

arctan rule

f. $\int \frac{x^3 - 4x - 10}{x^2 - x - 6} dx$

partial fractions
after long division

28. Integrate. (5 points each)

a. $\int \sin 8x \cos 5x dx$

$$= \frac{1}{2} \int \sin 13x + \sin 3x dx = -\frac{1}{26} \cos 13x - \frac{1}{6} \cos 3x + C$$

$$\begin{aligned}
 \text{b. } \int \frac{dx}{\cos x - 1} \frac{\cos x + 1}{\cos x + 1} &= \int \frac{\cos x + 1}{\cos^2 x - 1} dx = \int \frac{\cos x + 1}{\sin^2 x} dx \\
 &= \int \csc x \cot x + \csc^2 x dx \\
 &= -\csc x - \cot x + C
 \end{aligned}$$

29. Apply partial fractions to the expression $\frac{1}{(x^2-4)(x^2-x-6)(x^2+1)x^3}$. You do not need to integrate or solve for the coefficients. (5 points)

$$\frac{A}{x} + \frac{B}{x^2} + \frac{C}{x^3} + \frac{D}{x-2} + \frac{E}{x+2} + \frac{F}{(x+2)^2} + \frac{G}{x-3} + \frac{Hx+I}{x^2+1}$$

30. Use Simpson's Rule to estimate $\int_0^2 \frac{1}{1+x^5} dx$ with $n = 4$. (6 points)

$$h = \Delta x = \frac{1}{2}$$

$$f(x) = \frac{1}{6} \left[\frac{1}{1+0^5} + \frac{4}{1+(\frac{1}{2})^5} + \frac{2}{1+1^5} + \frac{4}{1+(\frac{3}{2})^5} + \frac{1}{1+2^5} \right]$$

$$\approx 1.0624 \dots$$

31. Determine if the improper integral $\int_1^{\infty} \frac{\ln x}{x} dx$ converge or diverge. Sketch the graph of the region to find all points of discontinuity inside the interval. If it converges, evaluate it. (5 points)

$$u = \ln x \quad du = \frac{1}{x} dx$$

$$\int u du = \frac{1}{2} u^2$$

$$\lim_{b \rightarrow \infty} \frac{1}{2} (\ln^2 b) - \frac{1}{2} \ln^2(1) = \infty$$

diverges



$$\arcsin x = x + \frac{x^3}{2 \cdot 3} + 1 \cdot \frac{3x^5}{2 \cdot 4 \cdot 5 \cdot 7} + \dots + \frac{(2n)! x^{2n+1}}{(2^n n!)^2 (2n+1)} \quad -1 < x < 1$$

$$\cosh x = 1 + \frac{x^2}{2!} + \frac{x^4}{4!} + \frac{x^6}{6!} + \dots = \sum_{n=0}^{\infty} \frac{1}{(2n)!} x^{2n} \quad (-\infty, \infty)$$

$$\sinh x = x + \frac{x^3}{3!} + \frac{x^5}{5!} + \frac{x^7}{7!} + \dots = \sum_{n=0}^{\infty} \frac{1}{(2n+1)!} x^{2n+1} \quad (-\infty, \infty)$$

$$a^3 - b^3 = (a - b)(a^2 + ab + b^2)$$

$$\cos^2 t = \frac{1}{2}(1 + \cos 2t)$$

$$\sin 2t = 2 \sin t \cos t, \cos 2t = \cos^2 t - \sin^2 t$$

$$\cos a \cos b = \frac{1}{2}[\cos(a+b) + \cos(a-b)]$$

$$\sin a \sin b = \frac{1}{2}[\cos(a-b) - \cos(a+b)]$$

$$\sin a \cos b = \frac{1}{2}[\sin(a+b) + \sin(a-b)]$$

Trapezoidal Rule Error: $|E| \leq \frac{(b-a)^3}{12n^2} [\max|f''(x)|]$

Simpson's Rule Error: $|E| \leq \frac{(b-a)^5}{180n^4} [\max|f^{IV}(x)|]$

Simpson's Rule: $f(x) \approx \frac{b-a}{3n} [f(x_0) + 4f(x_1) + 2f(x_2) + 4f(x_3) + \dots + 4f(x_{n-1}) + f(x_n)]$

Trapezoidal Rule: $f(x) \approx \frac{b-a}{2n} [f(x_0) + 2f(x_1) + 2f(x_2) + \dots + 2f(x_{n-1}) + f(x_n)]$

$$M = \rho \int_a^b f(x) - g(x) dx$$

$$M_x = \rho \int_a^b \frac{1}{2} (f^2(x) - g^2(x)) dx$$

$$M_y = \rho \int_a^b x(f(x) - g(x)) dx$$

$$\bar{x} = \frac{M_y}{M}, \bar{y} = \frac{M_x}{M}$$

Some useful formulas:

$$\frac{d^2y}{dx^2} = \frac{\frac{d}{dt} \left[\frac{dy}{dx} \right]}{\frac{dx}{dt}}$$

$$\frac{dy}{dx} = \frac{r(\theta)\cos\theta + r'(\theta)\sin\theta}{-r(\theta)\sin\theta + r'(\theta)\cos\theta}$$

$$s = \int_{\alpha}^{\beta} \sqrt{r^2 + \left(\frac{dr}{d\theta}\right)^2} d\theta$$

$$\sum_{n=1}^{\infty} \frac{1}{n^2} = \frac{\pi^2}{6}, \quad \sum_{n=1}^{\infty} \frac{1}{n^4} = \frac{\pi^4}{90}$$

$$f(x) = \sum_{n=0}^{\infty} \frac{f^{(n)}(c)(x-c)^n}{n!}$$

$$|R_n(x)| \leq \frac{\max|f^{(n+1)}(z)|}{(n+1)!} x^{n+1}$$

$\frac{1}{1-x} = \sum_{n=0}^{\infty} x^n = 1 + x + x^2 + x^3 + \dots$	$R = 1$
$e^x = \sum_{n=0}^{\infty} \frac{x^n}{n!} = 1 + \frac{x}{1!} + \frac{x^2}{2!} + \frac{x^3}{3!} + \dots$	$R = \infty$
$\sin x = \sum_{n=0}^{\infty} (-1)^n \frac{x^{2n+1}}{(2n+1)!} = x - \frac{x^3}{3!} + \frac{x^5}{5!} - \frac{x^7}{7!} + \dots$	$R = \infty$
$\cos x = \sum_{n=0}^{\infty} (-1)^n \frac{x^{2n}}{(2n)!} = 1 - \frac{x^2}{2!} + \frac{x^4}{4!} - \frac{x^6}{6!} + \dots$	$R = \infty$
$\tan^{-1} x = \sum_{n=0}^{\infty} (-1)^n \frac{x^{2n+1}}{2n+1} = x - \frac{x^3}{3} + \frac{x^5}{5} - \frac{x^7}{7} + \dots$	$R = 1$
$\ln(1+x) = \sum_{n=1}^{\infty} (-1)^{n-1} \frac{x^n}{n} = x - \frac{x^2}{2} + \frac{x^3}{3} - \frac{x^4}{4} + \dots$	$R = 1$
$(1+x)^k = \sum_{n=0}^{\infty} \binom{k}{n} x^n = 1 + kx + \frac{k(k-1)}{2!} x^2 + \frac{k(k-1)(k-2)}{3!} x^3 + \dots$	$R = 1$