

Instructions: Show all work. Answers without work required to obtain the solution will not receive full credit. Some questions may contain multiple parts: be sure to answer all of them. Give exact answers unless specifically asked to estimate.

1. Find the distance from the point $(4, -2, 1)$ to: (3 points each)

a. the line $\vec{r}(t) = (3t - 2)\hat{i} + (4 - t)\hat{j} + (2t + 1)\hat{k}$

$$\vec{PQ} \times \vec{u} = \begin{vmatrix} \hat{i} & \hat{j} & \hat{k} \\ -6 & 6 & 0 \\ 3 & -1 & 2 \end{vmatrix} = (12 - 0)\hat{i} - (-12 - 0)\hat{j} + (6 - 18)\hat{k}$$

$$\|\vec{PQ} \times \vec{u}\| = \sqrt{144 + 144 + 144} = 12\sqrt{3}$$

$$Q(-2, 4, 1)$$

$$\vec{PQ} = \langle -6, 6, 0 \rangle$$

$$\vec{u} = \langle 3, -1, 2 \rangle$$

$$\|\vec{u}\| = \sqrt{9 + 1 + 4} = \sqrt{14}$$

$$d = \frac{12\sqrt{3}}{\sqrt{14}}$$

- b. the plane $6x + 3y + z = 12$

$$Q(0, 0, 12)$$

$$\vec{PQ} = \langle 4, -2, -11 \rangle$$

$$\vec{n} = \langle 6, 3, 1 \rangle$$

$$\vec{PQ} \cdot \vec{n} = 24 - 6 - 11 = 7$$

$$\|\vec{n}\| = \sqrt{36 + 9 + 1} = \sqrt{46}$$

$$d = \frac{7}{\sqrt{46}}$$

2. Find an equation of the sphere with endpoints of a diameter at $(2, 1, 4)$ and $(4, 3, 10)$. (3 points)

$$\text{center} = \left(\frac{2+4}{2}, \frac{1+3}{2}, \frac{4+10}{2} \right) = (3, 2, 7)$$

$$r = \sqrt{1^2 + 1^2 + 3^2} = \sqrt{11}$$

$$(x-3)^2 + (y-2)^2 + (z-7)^2 = 11$$

3. For the vectors $\vec{u} = -3\hat{i} + 7\hat{j} + \hat{k}$, $\vec{v} = \langle 1, 3, -2 \rangle$, find the following: (2 points each)

a. $\vec{u} + 3\vec{v}$

$$-3 + 3(1) = 0$$

$$7 + 3(3) = 7 + 9 = 16$$

$$1 + 3(-2) = 1 - 6 = -5$$

$$\vec{u} + 3\vec{v} = \langle 0, 16, -5 \rangle$$

b. $\|\vec{u}\|$

$$\sqrt{9 + 49 + 1} = \sqrt{59}$$

c. A unit vector in the direction of \vec{v}

$$\sqrt{1+9+4} = \sqrt{14} \quad \hat{v} = \left\langle \frac{1}{\sqrt{14}}, \frac{3}{\sqrt{14}}, -\frac{2}{\sqrt{14}} \right\rangle$$

d. $\vec{u} \times \vec{v}$

$$\begin{vmatrix} \hat{i} & \hat{j} & \hat{k} \\ -3 & 7 & 1 \\ 1 & 3 & -2 \end{vmatrix} = (-14-3)\hat{i} - (6-1)\hat{j} + (-9-7)\hat{k} \\ -17\hat{i} - 5\hat{j} - 16\hat{k}$$

e. $\vec{u} \cdot \vec{v}$

$$-3 + 21 - 2 = 16$$

f. The angle between \vec{u} and \vec{v}

$$\cos \theta = \frac{16}{\sqrt{59}\sqrt{14}} \quad \theta = .98037... \\ \approx 56^\circ$$

4. Find the volume of the parallelepiped determined by the vectors $\langle 4, 2, 2 \rangle$, $\langle 3, 3, -1 \rangle$, $\langle 5, 5, 1 \rangle$. (3 points)

$$\begin{vmatrix} 4 & 2 & 2 \\ 3 & 3 & -1 \\ 5 & 5 & 1 \end{vmatrix} = 4(3+5) - 2(3+5) + 2(18-15) \\ 4(8) - 2(8) = 2(8) = \boxed{16}$$

5. Consider the vector $\vec{w} = \hat{i} + \sqrt{3}\hat{j}$. Find the magnitude and angle between the vector and the positive x -axis. Use that information to write the vector in polar form. (3 points)

$$\|\vec{w}\| = \sqrt{1+3} = \sqrt{4} = 2$$

$$\tan^{-1}\left(\frac{\sqrt{3}}{1}\right) = \pi/3 = \theta$$

$$\vec{w} = 2\cos\pi/3\hat{i} + 2\sin\pi/3\hat{j}$$

6. Find an equation of the line through $(1, -1, 1)$, parallel to $x + 2 = \frac{1}{2}y = z - 3$. Write your equation in vector-valued form. (3 points)

$$\langle 1, 2, 1 \rangle$$

$$\vec{r}(t) = (t+1)\hat{i} + (2t-1)\hat{j} + (t+1)\hat{k}$$

7. Find an equation of the plane containing the point $(2, 0, 1)$ and parallel to the plane $5x + 2y + z = 1$. (3 points)

$$\langle 5, 2, 1 \rangle$$

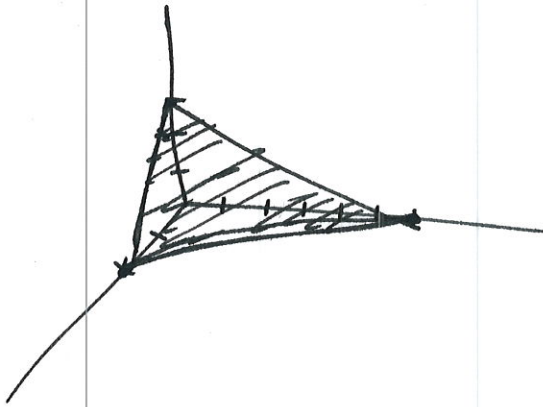
$$5(x-2) + 2(y-0) + 1(z-1) = 0$$

8. Use intercepts to graph the plane $3x + y + 2z = 6$. (3 points)

$$(2, 0, 0)$$

$$(0, 6, 0)$$

$$(0, 0, 3)$$



9. Identify the quadric surface, sketch or describe the graph including the orientation. (2 points each)

a. $9x^2 + 4y^2 + z^2 = 1$

ellipsoid \rightarrow longest stretch in z direction

b. $y^2 = x^2 + 2z^2$

elliptical
cone wrapped around y -axis



c. $x^2 - y^2 + z^2 - 4x - 2y - 4z + 4 = 0$

$$(x^2 - 4x + 4) - (y^2 + 2y + 1) + (z^2 - 4z + 4) = -4 + 1 + 4$$



hyperboloid of one sheet wrapped around y axis

d. $y = x^2 - z^2$

hyperbolic paraboloid \perp to y -axis

e. $y^2 = x^2 + 4z^2 + 4$

hyperboloid of 2 sheets

10. Rewrite the equation $z = xy$ in (3 points each)

a. Cylindrical coordinates

$$z = r^2 \cos \theta \sin \theta$$

b. Spherical coordinates

$$\rho \cos \phi = \rho^2 \sin^2 \phi \cos \theta \sin \theta$$

$$\rho = \cot \phi \csc \phi \sec \theta \csc \theta$$

11. Rewrite the equations in rectangular coordinates. (3 points each)

a. $z = 2r$

$$z = 2\sqrt{x^2 + y^2} \quad \text{or} \quad \frac{z^2}{4} = x^2 + y^2$$

b. $\rho = 4 \cos \phi$

$$\rho^2 = 4\rho \cos \phi$$

$$x^2 + y^2 + z^2 = 4z$$

12. Find a parametric equation that represents the intersection of $x^2 + y^2 = 4$ and $z = xy$. (5 points)

$$x = 2 \cos \theta = 2 \cos t$$

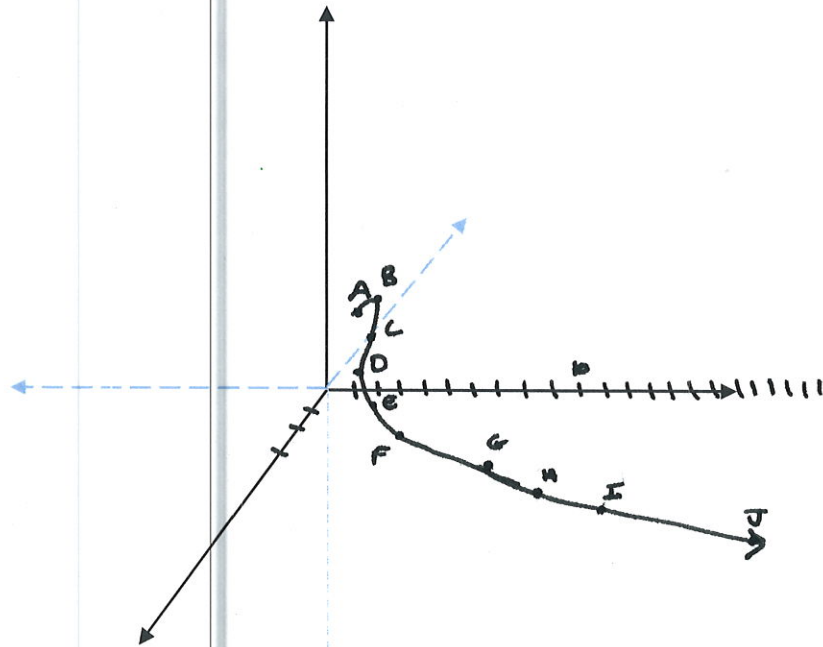
$$y = 2 \sin t$$

$$z = 4 \cos t \sin t$$

$$\vec{r}(t) = 2 \cos t \hat{i} + 2 \sin t \hat{j} + 4 \cos t \sin t \hat{k}$$

13. Sketch the graph of $\vec{r}(t) = t\hat{i} + e^t\hat{j} + \cos t\hat{k}$. Plot at around 10 points. (10 points)

t	x	y	z	
0	0	1	1	B
$\pi/6$	$\pi/6$	≈ 1.69	$.866$	C
$\pi/4$	$\pi/4$	≈ 2.19	$.71$	D
$\pi/3$	$\pi/3$	≈ 2.85	$.5$	E
$\pi/2$	$\pi/2$	≈ 4.81	0	F
$2\pi/3$	$2\pi/3$	≈ 8.12	$-.5$	G
$3\pi/4$	$3\pi/4$	≈ 10.55	$-.71$	H
$5\pi/6$	$5\pi/6$	≈ 13.71	$-.86$	I
π	π	≈ 23.14	-1	J
$-\pi/6$	$-\pi/6$	$\approx .59$	$-.866$	A



14. Find the domain and range of the function $f(x, y) = x + \ln(12 - 2x - 3y)$ write in proper set notation. (5 points)

$$12 - 2x - 3y > 0$$

$$12 > 2x + 3y$$

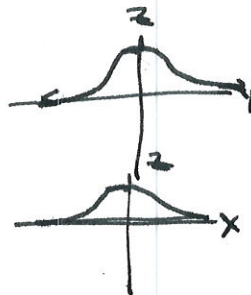
$$D: \{(x, y) \mid 2x + 3y < 12\}$$

$$R: (-\infty, \infty)$$

15. Draw the trace of the graph $f(x, y) = \frac{1}{1+x^2+y^2}$ on the plane $x = 0$ and $y = 0$. What do the level curves look like? (6 points)

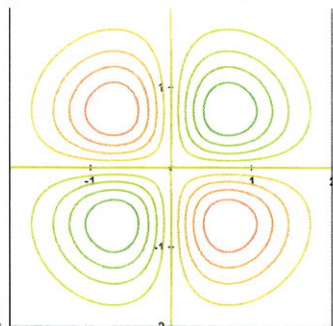
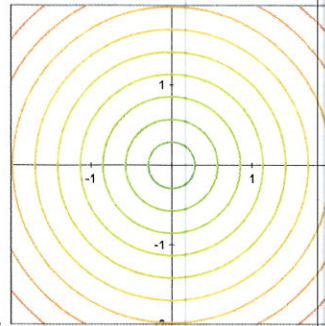
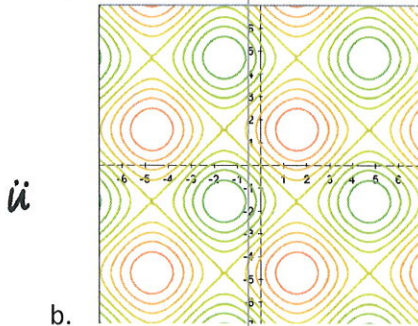
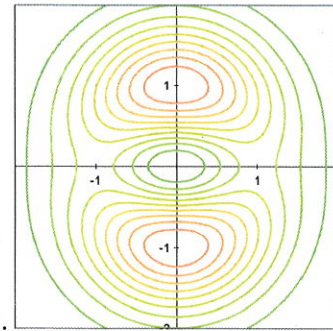
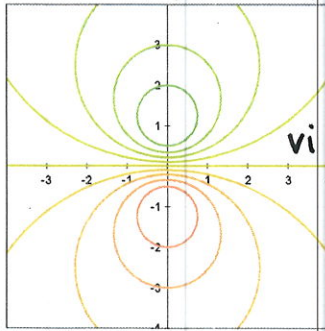
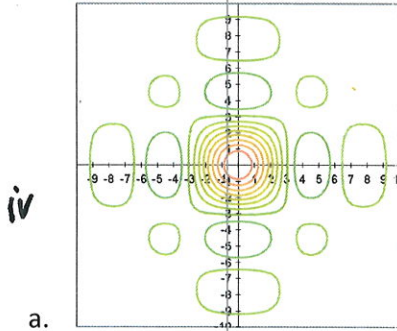
$$x=0 \Rightarrow z = \frac{1}{1+y^2}$$

$$y=0 \Rightarrow z = \frac{1}{1+x^2}$$



level curves are circles for $z \in (0, 1]$

16. Match each function to its set of level curves. (2 points each)



- i. $z = (x^2 + 3y^2)e^{-x^2 - y^2}$ E
- ii. $z = \sin x + \sin y$ B
- iii. $z = \sqrt{x^2 + y^2}$ D
- iv. $z = \frac{\sin x \sin y}{xy}$ A
- v. $z = xye^{-x^2 - y^2}$ F
- vi. $z = -\frac{3y}{x^2 + y^2 + 1}$ C

17. Find the limit. (5 points each)

a. $\lim_{(x,y,z) \rightarrow (0,0,0)} \frac{xy+yz}{x^2+y^2+z^2}$

$$\lim_{\rho \rightarrow 0} \frac{\rho^2 \sin^2 \varphi \cos \theta \sin \theta + \rho^2 \sin \varphi \sin \theta \cos \varphi}{\rho^2}$$

$$= \lim_{\rho \rightarrow 0} \sin^2 \varphi \cos \theta \sin \theta + \sin \varphi \sin \theta \cos \varphi \neq 0$$

Since value depends on path

DNE

b. $\lim_{(x,y) \rightarrow (0,0)} \frac{xy^4}{x^2+y^8}$

$x = ky^4$

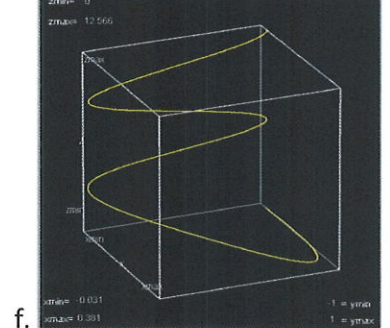
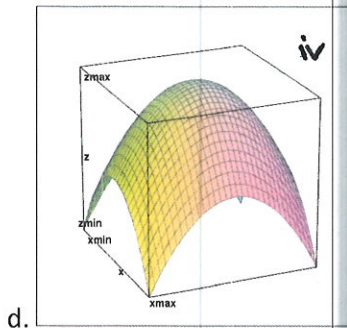
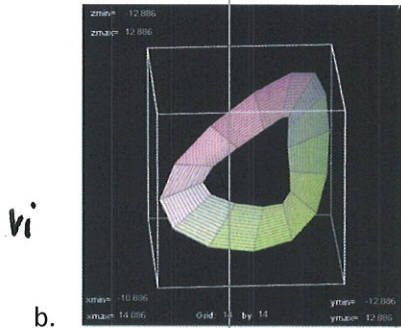
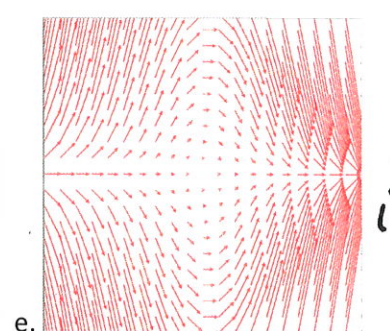
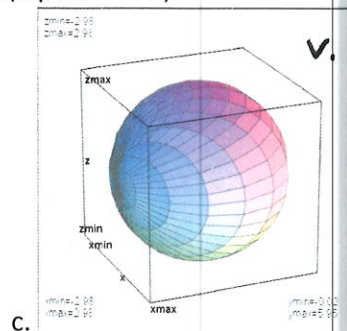
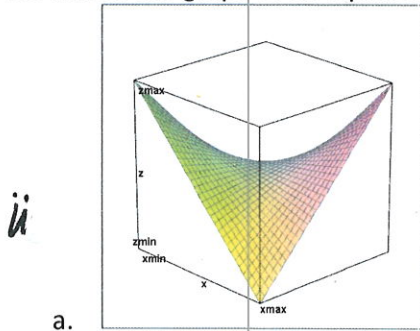
$$\lim_{y \rightarrow 0} \frac{ky^4 y^4}{k^2 y^8 + y^8} = \lim_{y \rightarrow 0} \frac{ky^8}{y^8(k^2 + 1)}$$

$$= \frac{k}{k^2 + 1}$$

Since this value depends on path

DNE

18. Match the graph to its equation. (2 point each)




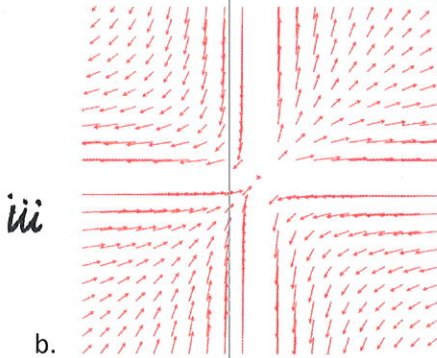


- i. $\vec{F}(x, y) = \sqrt{x^2 + y^2}\hat{i} - xy\hat{j}$ **E**
- ii. $z = xy$ **A**
- iii. $\vec{r}(t) = e^{-0.8t} \sin t \hat{i} + \cos t \hat{j} + t \hat{k}$ **F**
- iv. $z = 4 - r^2$ **D**
- v. $\rho = 6 \sin \theta \sin \phi$ **C**
- vi. $\vec{r}(u, v) = \left(2 \cos u + v \cos\left(\frac{u}{2}\right)\right)\hat{i} + \left(2 \sin u + v \cos\left(\frac{u}{2}\right)\right)\hat{j} + v \sin\left(\frac{u}{2}\right)\hat{k}$ **B**

19. Find a parametric equation for the part of the cylinder $y^2 + z^2 = 16$ between $x = 0, x = 5$. Be sure to state the bounds on the variables. (6 points)

$$\vec{r}(u, v) = v\hat{i} + 4\cos u\hat{j} + 4\sin u\hat{k}$$

$$0 \leq u \leq 2\pi, \quad 0 \leq v \leq 5$$

20. Match the equation of the vector field to the graph of the field. (2 points each)



- i. $\vec{F}(x, y) = \sqrt{xy}\hat{i} + e^{-y}\hat{j}$ **D**
- ii. $\vec{F}(x, y) = y\hat{i} + (x - y)\hat{j}$ **A**
- iii. $\vec{F}(x, y) = \frac{x}{y}\hat{i} + \frac{y}{x}\hat{j}$ **B**
- iv. $\vec{F}(x, y) = (\cos x + \sin y)\hat{i} + x\hat{j}$ **C**

Some useful formulas:

$$d = \frac{|\overline{PQ} \cdot \vec{n}|}{\|\vec{n}\|}$$

$$d = \frac{\|\overline{PQ} \times \vec{u}\|}{\|\vec{u}\|}$$